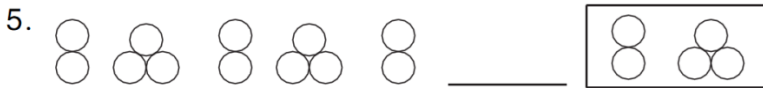
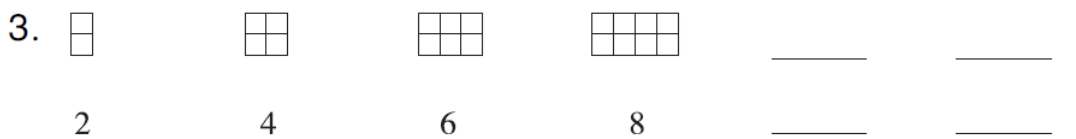
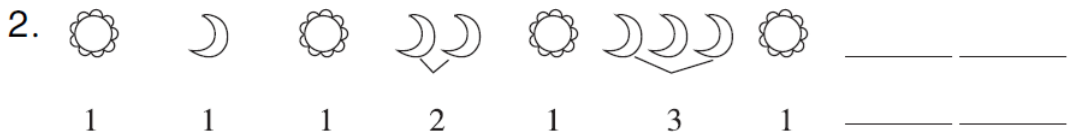
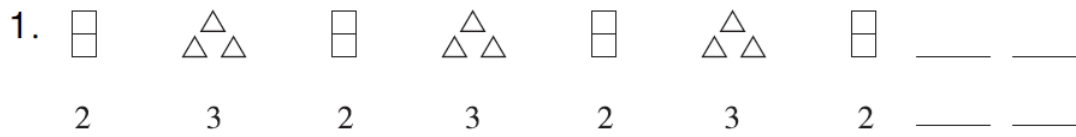


一年级数学下册第七单元达标测试卷一

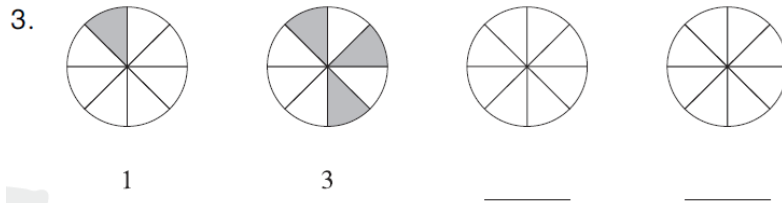
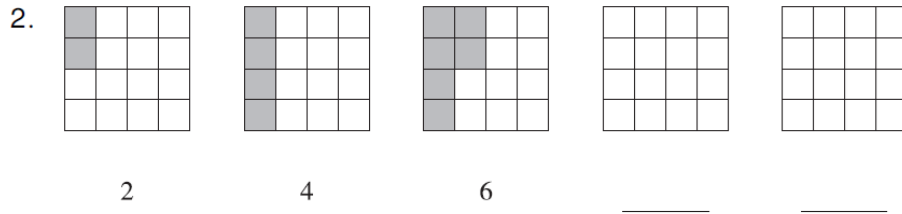
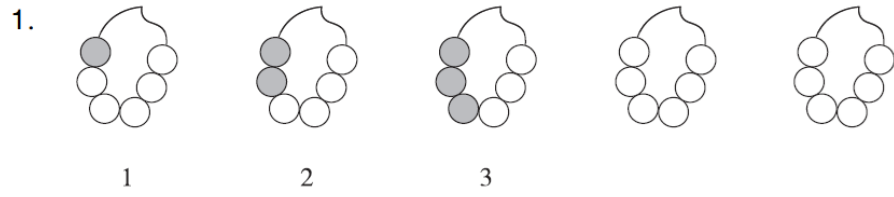
一、下一个是什么？圈出来。(每题 2 分，共 10 分)



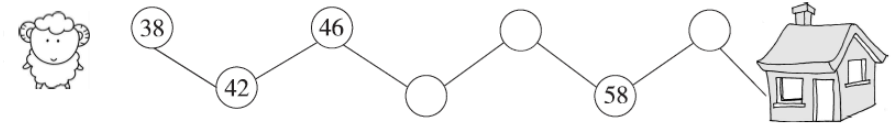
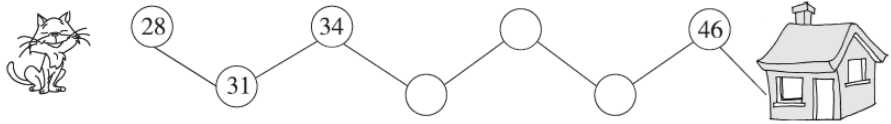
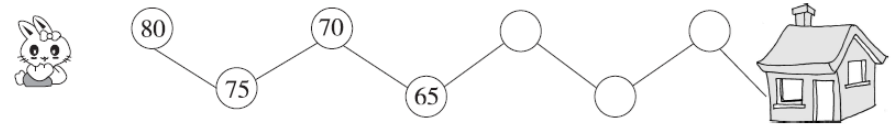
二、按规律画一画，填一填。(每题 4 分，共 16 分)



三、接着涂一涂，填一填。(每题 6 分，共 18 分)



四、按规律，把小动物送回家。(18分)



五、哪一组和其他三组的规律不一样，请在相应的()里画“√”。(每题4分，共8分)

1.

2	4	6	8	10
---	---	---	---	----

 ()

9	10	11	12	13
---	----	----	----	----

 ()

7	9	11	13	15
---	---	----	----	----

 ()

30	32	34	36	38
----	----	----	----	----

 ()

2.

23	24	25	26	27
----	----	----	----	----

 ()

85	75	65	55	45
----	----	----	----	----

 ()

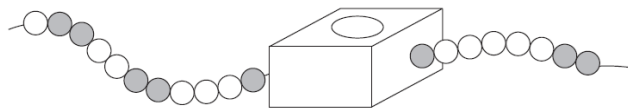
55	56	57	58	59
----	----	----	----	----

 ()

90	91	92	93	94
----	----	----	----	----

 ()

六、想一想，填一填。(6分)



箱子中有()颗●，()颗○。

七、按规律填一填。(每空2分，共12分)

1.

30 ┌───┐ │ 10 │ └───┘ 20	42 ┌───┐ │ 37 │ └───┘ 5	23 ┌───┐ │ 6 │ └───┘	 ┌───┐ │ 53 │ └───┘ 9
--------------------------------------	-------------------------------------	-------------------------------	-----------------------------------

2.

30 ┌───┐ │ 90 │ └───┘ 20 40	34 ┌───┐ │ 48 │ └───┘ 6 8	60 ┌───┐ │ 35 │ └───┘ 5	80 ┌───┐ │ 8 │ └───┘ 10
---	---------------------------------------	-------------------------------------	-------------------------------------

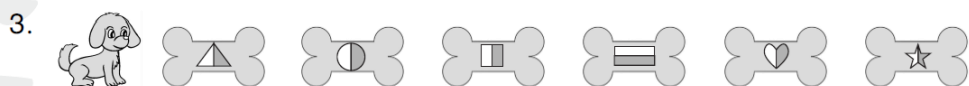
3.

6 ┌───┐ │ 2 │ └───┘ 4	10 ┌───┐ │ 4 │ └───┘ 6	14 ┌───┐ │ 6 │ └───┘ 8	18 ┌───┐ │ │ └───┘ 10
-----------------------------------	------------------------------------	------------------------------------	-------------------------------------

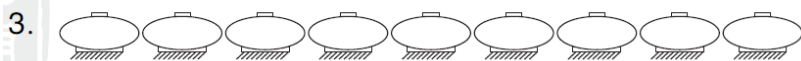
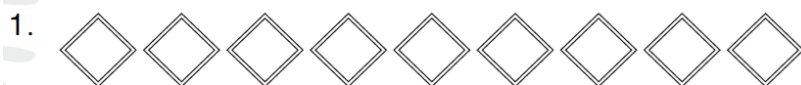
4.

3 ┌───┐ │ 6 │ └───┘ 1 2	2 ┌───┐ │ 13 │ └───┘ 5 6	10 ┌───┐ │ 40 │ └───┘ 10 20	45 ┌───┐ │ 45 │ └───┘ 5 10
-------------------------------------	--------------------------------------	---	--

八、各去掉一个，让小动物们的食物排列有规律。(每题2分，6分)



九、有规律地涂色。(每题 2 分, 共 6 分)



扫码看答案: 2396

www.201800.com